

VIDYA BHAWAN BALIKA VIDYA PITH

CLASS- 3

DATE- 13. 10. 20

SUB-MATHS

S.T-PRAGYA

BASED ON N.C.E.R.T PATTERN





CH- FRACTION

Solve these questions:-

1. Write the unshaded Parts :

a .....      b .....      c .....      d .....

Fill in the blanks:-

Figure	Numerator	Denominator	Shaded fraction	Unshaded fraction
a 	1	4	$\frac{1}{4}$	$\frac{3}{4}$
b 				
c 				
d 				
e 